



4. Write these scales in the treble clef, ascending and descending. Use the correct key signature for each, and label the Tonic and Dominant notes.


a) A minor harmonic




b) C# minor harmonic



c) F minor harmonic



d) B minor harmonic



e) G minor harmonic

